



# Mentor Guru








## Class 1 Maths Magic

### Chapter 13: How many Exercise QA

Question 1.

Write the number of sticks:

Answer.

(a)		<b>6</b>
(b)		<b>8</b>
(c)		<b>20</b>
(d)		<b>13</b>
(e)		<b>15</b>
(f)		<b>17</b>
(g)		<b>16</b>

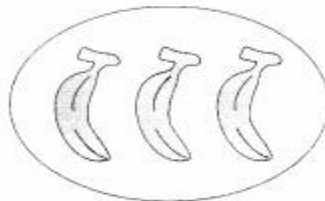
Question 2.

How many beads?

Answer.

(a)			<b>32</b>
(b)			<b>39</b>
(c)			<b>43</b>
(d)			<b>45</b>
(e)			<b>50</b>

Question 3.  
How much will the bananas cost?  
Answer.



uru

Question 4.  
Give number name.  
Answer.



Fifteen

Question 5.  
How many tens?  
Answer.






Question 6.  
Which is the bigger number?  
Answer.



26

Question 7.  
Develop a story on the pictures and narrate in the class.



uru

Answer.  
Billu has some pet animals like horse, goats etc. in his farm. He looks after them. Also, he makes baskets by using bamboo sticks. So, it shows that he is a hard-working boy.